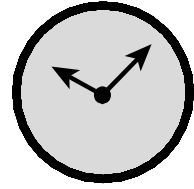


Name \_\_\_\_\_

Date \_\_\_\_\_

**BASIC FACTS: MULTIPLICATION**

Find the product. Use strategies to help you.

1. 
$$\begin{array}{r} 2 \\ \times 5 \\ \hline \end{array}$$

2. 
$$\begin{array}{r} 4 \\ \times 1 \\ \hline \end{array}$$

3. 
$$\begin{array}{r} 8 \\ \times 7 \\ \hline \end{array}$$

4. 
$$\begin{array}{r} 2 \\ \times 0 \\ \hline \end{array}$$

5. 
$$\begin{array}{r} 4 \\ \times 3 \\ \hline \end{array}$$

6. 
$$\begin{array}{r} 6 \\ \times 3 \\ \hline \end{array}$$

7. 
$$\begin{array}{r} 6 \\ \times 9 \\ \hline \end{array}$$

8. 
$$\begin{array}{r} 6 \\ \times 6 \\ \hline \end{array}$$

9. 
$$\begin{array}{r} 0 \\ \times 6 \\ \hline \end{array}$$

10. 
$$\begin{array}{r} 2 \\ \times 7 \\ \hline \end{array}$$

11. 
$$\begin{array}{r} 6 \\ \times 8 \\ \hline \end{array}$$

12. 
$$\begin{array}{r} 6 \\ \times 5 \\ \hline \end{array}$$

13. 
$$\begin{array}{r} 5 \\ \times 7 \\ \hline \end{array}$$

14. 
$$\begin{array}{r} 3 \\ \times 5 \\ \hline \end{array}$$

15. 
$$\begin{array}{r} 4 \\ \times 7 \\ \hline \end{array}$$

16. 
$$\begin{array}{r} 2 \\ \times 9 \\ \hline \end{array}$$

17. 
$$\begin{array}{r} 2 \\ \times 8 \\ \hline \end{array}$$

18. 
$$\begin{array}{r} 3 \\ \times 3 \\ \hline \end{array}$$

19. 
$$\begin{array}{r} 6 \\ \times 2 \\ \hline \end{array}$$

20. 
$$\begin{array}{r} 0 \\ \times 4 \\ \hline \end{array}$$

21. 
$$\begin{array}{r} 7 \\ \times 9 \\ \hline \end{array}$$

22. 
$$\begin{array}{r} 7 \\ \times 5 \\ \hline \end{array}$$

23. 
$$\begin{array}{r} 3 \\ \times 4 \\ \hline \end{array}$$

24. 
$$\begin{array}{r} 7 \\ \times 6 \\ \hline \end{array}$$

25. 
$$\begin{array}{r} 3 \\ \times 7 \\ \hline \end{array}$$

26. 
$$\begin{array}{r} 4 \\ \times 6 \\ \hline \end{array}$$

27. 
$$\begin{array}{r} 8 \\ \times 5 \\ \hline \end{array}$$

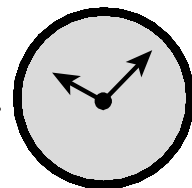
28. 
$$\begin{array}{r} 4 \\ \times 8 \\ \hline \end{array}$$

29. 
$$\begin{array}{r} 9 \\ \times 1 \\ \hline \end{array}$$

30. 
$$\begin{array}{r} 9 \\ \times 5 \\ \hline \end{array}$$

I need more practice with these facts:

Name \_\_\_\_\_ Date \_\_\_\_\_

**BASIC FACTS: MULTIPLICATION**

Find the product. Use strategies to help you.

1. 
$$\begin{array}{r} 0 \\ \times 8 \\ \hline \end{array}$$

2. 
$$\begin{array}{r} 9 \\ \times 7 \\ \hline \end{array}$$

3. 
$$\begin{array}{r} 5 \\ \times 5 \\ \hline \end{array}$$

4. 
$$\begin{array}{r} 3 \\ \times 6 \\ \hline \end{array}$$

5. 
$$\begin{array}{r} 2 \\ \times 1 \\ \hline \end{array}$$

6. 
$$\begin{array}{r} 8 \\ \times 3 \\ \hline \end{array}$$

7. 
$$\begin{array}{r} 4 \\ \times 3 \\ \hline \end{array}$$

8. 
$$\begin{array}{r} 7 \\ \times 0 \\ \hline \end{array}$$

9. 
$$\begin{array}{r} 1 \\ \times 7 \\ \hline \end{array}$$

10. 
$$\begin{array}{r} 6 \\ \times 1 \\ \hline \end{array}$$

11. 
$$\begin{array}{r} 8 \\ \times 8 \\ \hline \end{array}$$

12. 
$$\begin{array}{r} 5 \\ \times 9 \\ \hline \end{array}$$

13. 
$$\begin{array}{r} 9 \\ \times 2 \\ \hline \end{array}$$

14. 
$$\begin{array}{r} 9 \\ \times 3 \\ \hline \end{array}$$

15. 
$$\begin{array}{r} 1 \\ \times 9 \\ \hline \end{array}$$

16. 
$$\begin{array}{r} 2 \\ \times 3 \\ \hline \end{array}$$

17. 
$$\begin{array}{r} 0 \\ \times 0 \\ \hline \end{array}$$

18. 
$$\begin{array}{r} 4 \\ \times 1 \\ \hline \end{array}$$

19. 
$$\begin{array}{r} 7 \\ \times 7 \\ \hline \end{array}$$

20. 
$$\begin{array}{r} 5 \\ \times 4 \\ \hline \end{array}$$

21. 
$$\begin{array}{r} 5 \\ \times 1 \\ \hline \end{array}$$

22. 
$$\begin{array}{r} 7 \\ \times 3 \\ \hline \end{array}$$

23. 
$$\begin{array}{r} 9 \\ \times 6 \\ \hline \end{array}$$

24. 
$$\begin{array}{r} 3 \\ \times 0 \\ \hline \end{array}$$

25. 
$$\begin{array}{r} 3 \\ \times 6 \\ \hline \end{array}$$

26. 
$$\begin{array}{r} 3 \\ \times 1 \\ \hline \end{array}$$

27. 
$$\begin{array}{r} 6 \\ \times 7 \\ \hline \end{array}$$

28. 
$$\begin{array}{r} 9 \\ \times 8 \\ \hline \end{array}$$

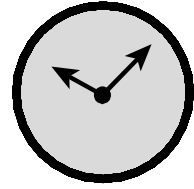
29. 
$$\begin{array}{r} 2 \\ \times 6 \\ \hline \end{array}$$

30. 
$$\begin{array}{r} 9 \\ \times 4 \\ \hline \end{array}$$

I need more practice with these facts:

Name \_\_\_\_\_

Date \_\_\_\_\_

**BASIC FACTS: MULTIPLICATION**

Find the product. Use strategies to help you.

1.  $\begin{array}{r} 1 \\ \times 1 \\ \hline \end{array}$

2.  $\begin{array}{r} 7 \\ \times 8 \\ \hline \end{array}$

3.  $\begin{array}{r} 4 \\ \times 5 \\ \hline \end{array}$

4.  $\begin{array}{r} 9 \\ \times 2 \\ \hline \end{array}$

5.  $\begin{array}{r} 0 \\ \times 7 \\ \hline \end{array}$

6.  $\begin{array}{r} 2 \\ \times 4 \\ \hline \end{array}$

7.  $\begin{array}{r} 8 \\ \times 9 \\ \hline \end{array}$

8.  $\begin{array}{r} 8 \\ \times 1 \\ \hline \end{array}$

9.  $\begin{array}{r} 1 \\ \times 6 \\ \hline \end{array}$

10.  $\begin{array}{r} 5 \\ \times 2 \\ \hline \end{array}$

11.  $\begin{array}{r} 7 \\ \times 4 \\ \hline \end{array}$

12.  $\begin{array}{r} 9 \\ \times 0 \\ \hline \end{array}$

13.  $\begin{array}{r} 5 \\ \times 6 \\ \hline \end{array}$

14.  $\begin{array}{r} 7 \\ \times 3 \\ \hline \end{array}$

15.  $\begin{array}{r} 8 \\ \times 6 \\ \hline \end{array}$

16.  $\begin{array}{r} 3 \\ \times 4 \\ \hline \end{array}$

17.  $\begin{array}{r} 5 \\ \times 8 \\ \hline \end{array}$

18.  $\begin{array}{r} 8 \\ \times 4 \\ \hline \end{array}$

19.  $\begin{array}{r} 9 \\ \times 9 \\ \hline \end{array}$

20.  $\begin{array}{r} 0 \\ \times 1 \\ \hline \end{array}$

21.  $\begin{array}{r} 4 \\ \times 4 \\ \hline \end{array}$

22.  $\begin{array}{r} 0 \\ \times 5 \\ \hline \end{array}$

23.  $\begin{array}{r} 3 \\ \times 8 \\ \hline \end{array}$

24.  $\begin{array}{r} 6 \\ \times 2 \\ \hline \end{array}$

25.  $\begin{array}{r} 2 \\ \times 2 \\ \hline \end{array}$

26.  $\begin{array}{r} 5 \\ \times 3 \\ \hline \end{array}$

27.  $\begin{array}{r} 8 \\ \times 0 \\ \hline \end{array}$

28.  $\begin{array}{r} 3 \\ \times 9 \\ \hline \end{array}$

29.  $\begin{array}{r} 9 \\ \times 6 \\ \hline \end{array}$

30.  $\begin{array}{r} 4 \\ \times 9 \\ \hline \end{array}$

I need more practice with these facts: