


Name _____

Date _____

BASIC FACTS: DIVISION

.....

Find the quotient. Use strategies to help you.

1. $1 \overline{)6}$

2. $7 \overline{)28}$

3. $4 \overline{)12}$

4. $5 \overline{)45}$

5. $3 \overline{)0}$

6. $6 \overline{)36}$

7. $3 \overline{)27}$

8. $2 \overline{)10}$

9. $8 \overline{)8}$

10. $9 \overline{)63}$

11. $3 \overline{)21}$

12. $6 \overline{)12}$

13. $5 \overline{)25}$

14. $7 \overline{)56}$

15. $2 \overline{)2}$

16. $4 \overline{)36}$

17. $5 \overline{)15}$

18. $1 \overline{)3}$

19. $5 \overline{)35}$

20. $3 \overline{)9}$

21. $1 \overline{)9}$

22. $2 \overline{)4}$

23. $6 \overline{)0}$

24. $8 \overline{)48}$

25. $9 \overline{)27}$

26. $4 \overline{)24}$

27. $2 \overline{)14}$

28. $6 \overline{)24}$

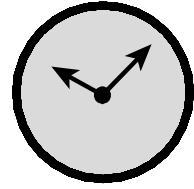
29. $4 \overline{)20}$

30. $2 \overline{)18}$

I need more practice with these facts:

Name _____

Date _____

BASIC FACTS: DIVISION

Find the quotient. Use strategies to help you.

$1.6 \overline{)42}$

$2.4 \overline{)32}$

$3.5 \overline{)0}$

$4.1 \overline{)2}$

$5.3 \overline{)15}$

$6.8 \overline{)64}$

$7.3 \overline{)3}$

$8.6 \overline{)18}$

$9.7 \overline{)49}$

$10.3 \overline{)6}$

$11.1 \overline{)5}$

$12.8 \overline{)40}$

$13.9 \overline{)72}$

$14.5 \overline{)30}$

$15.9 \overline{)0}$

$16.4 \overline{)16}$

$17.5 \overline{)10}$

$18.7 \overline{)21}$

$19.3 \overline{)18}$

$20.6 \overline{)6}$

$21.6 \overline{)54}$

$22.2 \overline{)16}$

$23.9 \overline{)45}$

$24.7 \overline{)14}$

$25.5 \overline{)20}$

$26.1 \overline{)0}$

$27.6 \overline{)48}$

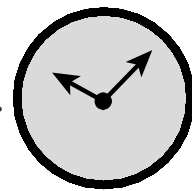
$28.4 \overline{)28}$

$29.5 \overline{)5}$

$30.7 \overline{)35}$

I need more practice with these facts:

Name _____ Date _____

BASIC FACTS: DIVISION

Find the quotient. Use strategies to help you.

1. $1\overline{)4}$

2. $7\overline{)42}$

3. $8\overline{)24}$

4. $7\overline{)7}$

5. $2\overline{)12}$

6. $8\overline{)32}$

7. $6\overline{)30}$

8. $4\overline{)8}$

9. $2\overline{)0}$

10. $5\overline{)40}$

11. $7\overline{)0}$

12. $3\overline{)24}$

13. $1\overline{)7}$

14. $8\overline{)72}$

15. $2\overline{)16}$

16. $9\overline{)9}$

17. $9\overline{)54}$

18. $2\overline{)6}$

19. $7\overline{)63}$

20. $4\overline{)0}$

21. $9\overline{)81}$

22. $1\overline{)1}$

23. $9\overline{)36}$

24. $8\overline{)0}$

25. $5\overline{)45}$

26. $3\overline{)12}$

27. $9\overline{)18}$

28. $2\overline{)8}$

29. $8\overline{)56}$

30. $4\overline{)4}$

I need more practice with these facts: