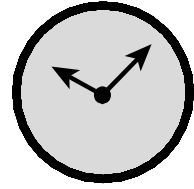


Name _____

Date _____

BASIC FACTS: ADDITION

Find the sum. Use strategies to help you.

1.
$$\begin{array}{r} 4 \\ + 5 \\ \hline \end{array}$$

2.
$$\begin{array}{r} 2 \\ + 4 \\ \hline \end{array}$$

3.
$$\begin{array}{r} 0 \\ + 7 \\ \hline \end{array}$$

4.
$$\begin{array}{r} 6 \\ + 1 \\ \hline \end{array}$$

5.
$$\begin{array}{r} 8 \\ + 2 \\ \hline \end{array}$$

6.
$$\begin{array}{r} 1 \\ + 4 \\ \hline \end{array}$$

7.
$$\begin{array}{r} 5 \\ + 4 \\ \hline \end{array}$$

8.
$$\begin{array}{r} 8 \\ + 9 \\ \hline \end{array}$$

9.
$$\begin{array}{r} 6 \\ + 5 \\ \hline \end{array}$$

10.
$$\begin{array}{r} 9 \\ + 2 \\ \hline \end{array}$$

11.
$$\begin{array}{r} 7 \\ + 8 \\ \hline \end{array}$$

12.
$$\begin{array}{r} 5 \\ + 3 \\ \hline \end{array}$$

13.
$$\begin{array}{r} 9 \\ + 9 \\ \hline \end{array}$$

14.
$$\begin{array}{r} 1 \\ + 0 \\ \hline \end{array}$$

15.
$$\begin{array}{r} 3 \\ + 5 \\ \hline \end{array}$$

16.
$$\begin{array}{r} 6 \\ + 4 \\ \hline \end{array}$$

17.
$$\begin{array}{r} 5 \\ + 9 \\ \hline \end{array}$$

18.
$$\begin{array}{r} 6 \\ + 7 \\ \hline \end{array}$$

19.
$$\begin{array}{r} 1 \\ + 9 \\ \hline \end{array}$$

20.
$$\begin{array}{r} 8 \\ + 4 \\ \hline \end{array}$$

21.
$$\begin{array}{r} 1 \\ + 5 \\ \hline \end{array}$$

22.
$$\begin{array}{r} 3 \\ + 3 \\ \hline \end{array}$$

23.
$$\begin{array}{r} 8 \\ + 8 \\ \hline \end{array}$$

24.
$$\begin{array}{r} 6 \\ + 2 \\ \hline \end{array}$$

25.
$$\begin{array}{r} 5 \\ + 7 \\ \hline \end{array}$$

26.
$$\begin{array}{r} 3 \\ + 7 \\ \hline \end{array}$$

27.
$$\begin{array}{r} 3 \\ + 9 \\ \hline \end{array}$$

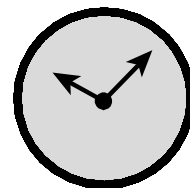
28.
$$\begin{array}{r} 5 \\ + 8 \\ \hline \end{array}$$

29.
$$\begin{array}{r} 7 \\ + 5 \\ \hline \end{array}$$

30.
$$\begin{array}{r} 2 \\ + 8 \\ \hline \end{array}$$

I need more practice with these facts:

Name _____ Date _____

BASIC FACTS: ADDITION

Find the sum. Use strategies to help you.

1.
$$\begin{array}{r} 0 \\ + 4 \\ \hline \end{array}$$

2.
$$\begin{array}{r} 9 \\ + 6 \\ \hline \end{array}$$

3.
$$\begin{array}{r} 7 \\ + 3 \\ \hline \end{array}$$

4.
$$\begin{array}{r} 4 \\ + 5 \\ \hline \end{array}$$

5.
$$\begin{array}{r} 1 \\ + 8 \\ \hline \end{array}$$

6.
$$\begin{array}{r} 3 \\ + 6 \\ \hline \end{array}$$

7.
$$\begin{array}{r} 5 \\ + 0 \\ \hline \end{array}$$

8.
$$\begin{array}{r} 2 \\ + 1 \\ \hline \end{array}$$

9.
$$\begin{array}{r} 9 \\ + 8 \\ \hline \end{array}$$

10.
$$\begin{array}{r} 7 \\ + 6 \\ \hline \end{array}$$

11.
$$\begin{array}{r} 7 \\ + 4 \\ \hline \end{array}$$

12.
$$\begin{array}{r} 4 \\ + 9 \\ \hline \end{array}$$

13.
$$\begin{array}{r} 4 \\ + 1 \\ \hline \end{array}$$

14.
$$\begin{array}{r} 8 \\ + 5 \\ \hline \end{array}$$

15.
$$\begin{array}{r} 5 \\ + 6 \\ \hline \end{array}$$

16.
$$\begin{array}{r} 4 \\ + 7 \\ \hline \end{array}$$

17.
$$\begin{array}{r} 1 \\ + 3 \\ \hline \end{array}$$

18.
$$\begin{array}{r} 7 \\ + 9 \\ \hline \end{array}$$

19.
$$\begin{array}{r} 3 \\ + 4 \\ \hline \end{array}$$

20.
$$\begin{array}{r} 2 \\ + 2 \\ \hline \end{array}$$

21.
$$\begin{array}{r} 8 \\ + 7 \\ \hline \end{array}$$

22.
$$\begin{array}{r} 9 \\ + 3 \\ \hline \end{array}$$

23.
$$\begin{array}{r} 9 \\ + 2 \\ \hline \end{array}$$

24.
$$\begin{array}{r} 7 \\ + 0 \\ \hline \end{array}$$

25.
$$\begin{array}{r} 1 \\ + 1 \\ \hline \end{array}$$

26.
$$\begin{array}{r} 6 \\ + 8 \\ \hline \end{array}$$

27.
$$\begin{array}{r} 5 \\ + 2 \\ \hline \end{array}$$

28.
$$\begin{array}{r} 0 \\ + 6 \\ \hline \end{array}$$

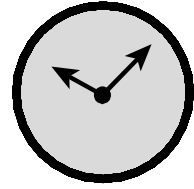
29.
$$\begin{array}{r} 3 \\ + 2 \\ \hline \end{array}$$

30.
$$\begin{array}{r} 0 \\ + 0 \\ \hline \end{array}$$

I need more practice with these facts:

Name _____

Date _____

BASIC FACTS: ADDITION

Find the sum. Use strategies to help you.

1.
$$\begin{array}{r} 4 \\ + 3 \\ \hline \end{array}$$

2.
$$\begin{array}{r} 6 \\ + 1 \\ \hline \end{array}$$

3.
$$\begin{array}{r} 8 \\ + 9 \\ \hline \end{array}$$

4.
$$\begin{array}{r} 2 \\ + 5 \\ \hline \end{array}$$

5.
$$\begin{array}{r} 2 \\ + 0 \\ \hline \end{array}$$

6.
$$\begin{array}{r} 2 \\ + 7 \\ \hline \end{array}$$

7.
$$\begin{array}{r} 0 \\ + 3 \\ \hline \end{array}$$

8.
$$\begin{array}{r} 7 \\ + 2 \\ \hline \end{array}$$

9.
$$\begin{array}{r} 5 \\ + 5 \\ \hline \end{array}$$

10.
$$\begin{array}{r} 9 \\ + 4 \\ \hline \end{array}$$

11.
$$\begin{array}{r} 8 \\ + 0 \\ \hline \end{array}$$

12.
$$\begin{array}{r} 3 \\ + 1 \\ \hline \end{array}$$

13.
$$\begin{array}{r} 6 \\ + 6 \\ \hline \end{array}$$

14.
$$\begin{array}{r} 2 \\ + 3 \\ \hline \end{array}$$

15.
$$\begin{array}{r} 8 \\ + 3 \\ \hline \end{array}$$

16.
$$\begin{array}{r} 4 \\ + 2 \\ \hline \end{array}$$

17.
$$\begin{array}{r} 6 \\ + 9 \\ \hline \end{array}$$

18.
$$\begin{array}{r} 0 \\ + 5 \\ \hline \end{array}$$

19.
$$\begin{array}{r} 4 \\ + 8 \\ \hline \end{array}$$

20.
$$\begin{array}{r} 4 \\ + 6 \\ \hline \end{array}$$

21.
$$\begin{array}{r} 2 \\ + 9 \\ \hline \end{array}$$

22.
$$\begin{array}{r} 0 \\ + 1 \\ \hline \end{array}$$

23.
$$\begin{array}{r} 9 \\ + 1 \\ \hline \end{array}$$

24.
$$\begin{array}{r} 1 \\ + 2 \\ \hline \end{array}$$

25.
$$\begin{array}{r} 5 \\ + 1 \\ \hline \end{array}$$

26.
$$\begin{array}{r} 9 \\ + 5 \\ \hline \end{array}$$

27.
$$\begin{array}{r} 7 \\ + 7 \\ \hline \end{array}$$

28.
$$\begin{array}{r} 4 \\ + 0 \\ \hline \end{array}$$

29.
$$\begin{array}{r} 9 \\ + 7 \\ \hline \end{array}$$

30.
$$\begin{array}{r} 8 \\ + 1 \\ \hline \end{array}$$

I need more practice with these facts: